






Adding objects up to 10

Kindergarten Addition Worksheet

Write the answer.

$$\begin{array}{r} 1. \quad 0 \\ + 6 \\ \hline \end{array}$$


$$\begin{array}{r} 2. \quad 2 \\ + 1 \\ \hline \end{array}$$



$$\begin{array}{r} 3. \quad 1 \\ + 1 \\ \hline \end{array}$$





$$\begin{array}{r} 4. \quad 1 \\ + 3 \\ \hline \end{array}$$



$$\begin{array}{r} 5. \quad 2 \\ + 3 \\ \hline \end{array}$$



$$\begin{array}{r} 6. \quad 4 \\ + 0 \\ \hline \end{array}$$


$$\begin{array}{r} 7. \quad 5 \\ + 3 \\ \hline \end{array}$$



$$\begin{array}{r} 8. \quad 3 \\ + 3 \\ \hline \end{array}$$



Answers

1. 6

2. 3

3. 2

4. 4

5. 5

6. 4

7. 8

8. 6