

Name \_\_\_\_\_


Date \_\_\_\_\_



# ADDITION SENTENCES TO 10 SHEET 5

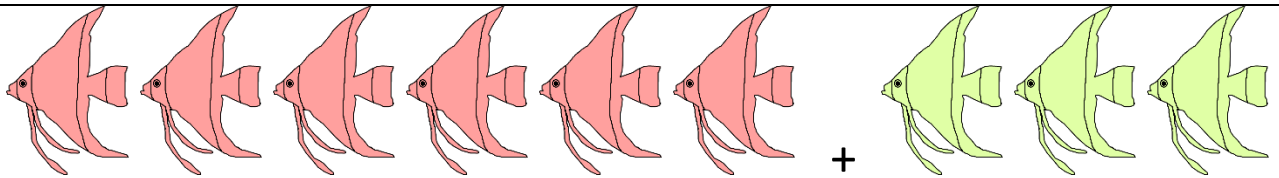
Write the addition sentence that matches each picture.

1)




$$\underline{\quad} + \underline{\quad} = \underline{\quad}$$

2)



$$\underline{\quad} + \underline{\quad} = \underline{\quad}$$

3)




$$\underline{\quad} + \underline{\quad} = \underline{\quad}$$

4)




$$\underline{\quad} + \underline{\quad} = \underline{\quad}$$

5)



$$\underline{\quad} + \underline{\quad} = \underline{\quad}$$

6)



$$\underline{\quad} + \underline{\quad} = \underline{\quad}$$


Name

Date



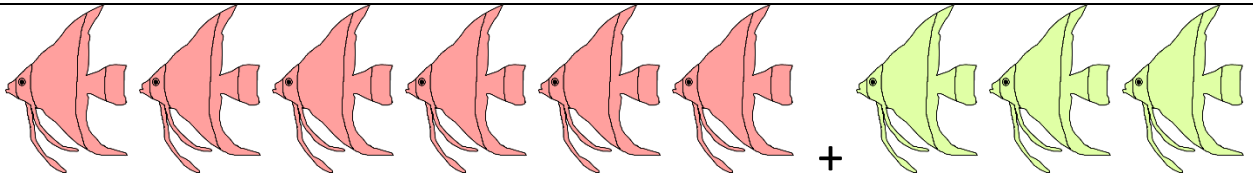
# ADDITION SENTENCES TO 10 SHEET 5 ANSWERS

1)




$$\underline{2} + \underline{4} = \underline{6}$$

2)



$$\underline{6} + \underline{3} = \underline{9}$$

3)



$$\underline{3} + \underline{5} = \underline{8}$$

4)




$$\underline{1} + \underline{6} = \underline{7}$$

5)



$$\underline{4} + \underline{6} = \underline{10}$$

6)



$$\underline{4} + \underline{4} = \underline{8}$$