

Name

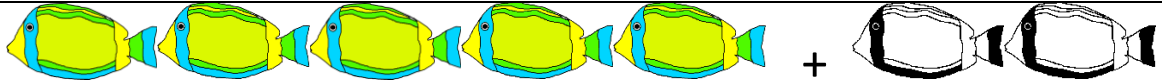
Date



# ADDITION SENTENCES TO 10 SHEET 6

Write the addition sentence that matches each picture.

1)



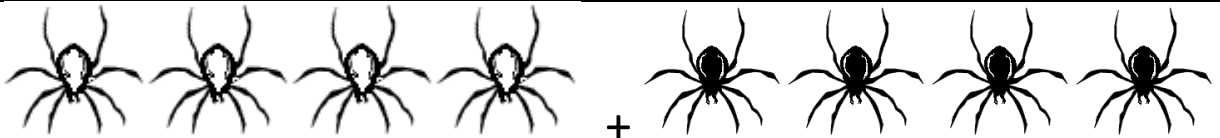
$$\underline{\quad} + \underline{\quad} = \underline{\quad}$$

2)



$$\underline{\quad} + \underline{\quad} = \underline{\quad}$$

3)



$$\underline{\quad} + \underline{\quad} = \underline{\quad}$$

4)



$$\underline{\quad} + \underline{\quad} = \underline{\quad}$$

5)



$$\underline{\quad} + \underline{\quad} = \underline{\quad}$$

6)



$$\underline{\quad} + \underline{\quad} = \underline{\quad}$$

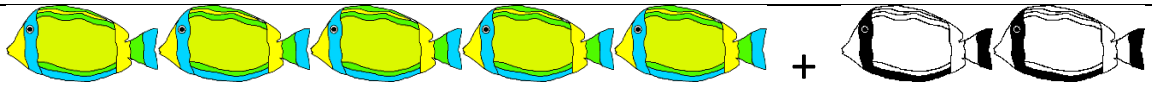
Name

Date



# ADDITION SENTENCES TO 10 SHEET 6 ANSWERS

1)



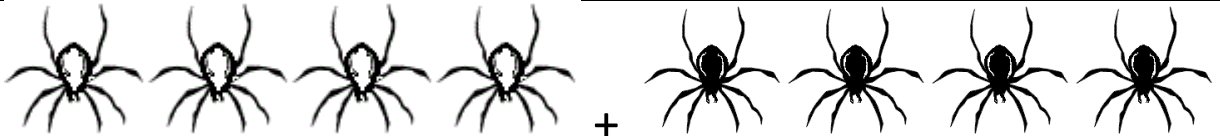
$$5 + 2 = 7$$

2)




$$3 + 7 = 10$$

3)



$$4 + 4 = 8$$

4)



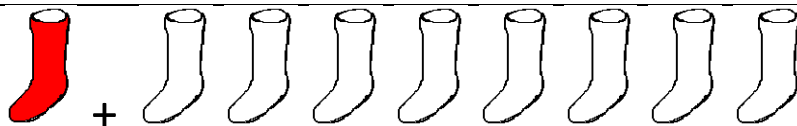
$$8 + 2 = 10$$

5)



$$4 + 5 = 9$$

6)



$$1 + 8 = 9$$