

Name _____

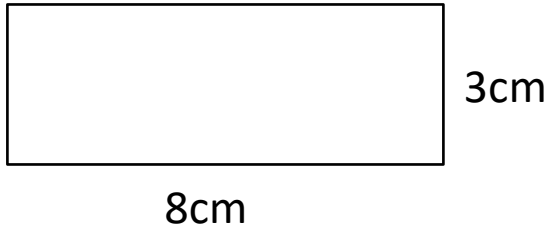
Date _____



AREA SHEET 3

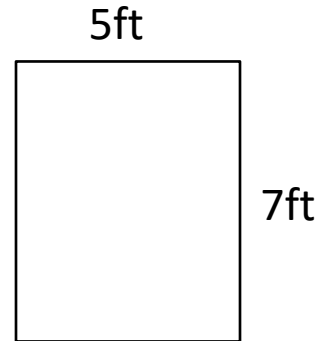
Work out the area of the following rectangles. They are not to scale.

1)



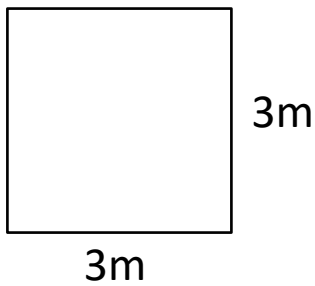
Area = _____ square cm

2)



Area = _____ square ft

3)



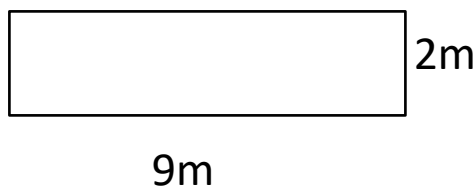
Area = _____ square m

4)



Area = _____ square in

5)



Area = _____ square m

6)



Area = _____ square cm



Name

Date



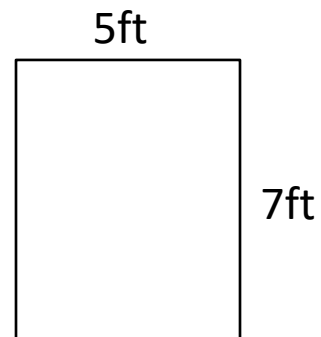
AREA SHEET 3 ANSWERS

1)



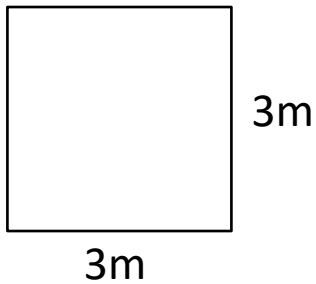
Area = 24 square cm

2)



Area = 35 square ft

3)



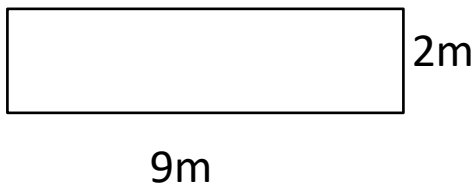
Area = 9 square m

4)



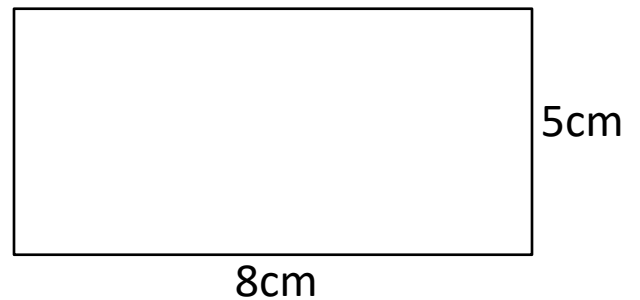
Area = 40 square in

5)



Area = 18 square m

6)



Area = 40 square cm

