

Name

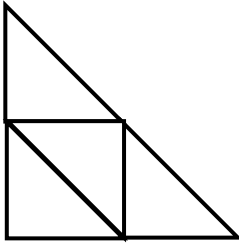
Date



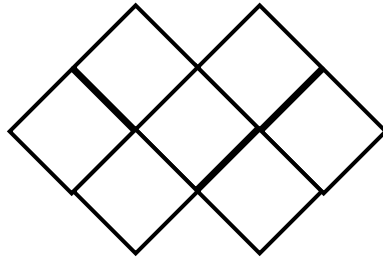
## FRACTIONS OF SHAPES 3

Shade the correct fraction of each shape.

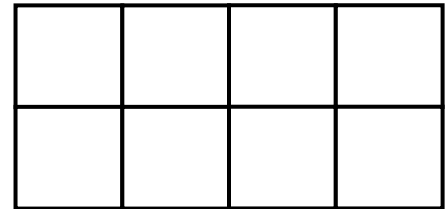
Remember  $\frac{1}{4}$  means 1 out of every 4!



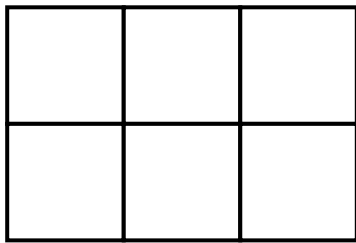
Shade  $\frac{1}{2}$




Shade  $\frac{4}{7}$



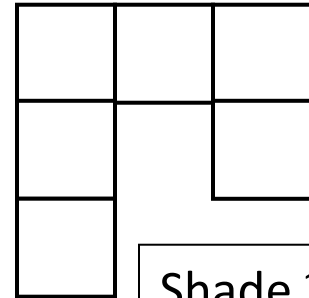
Shade  $\frac{1}{4}$



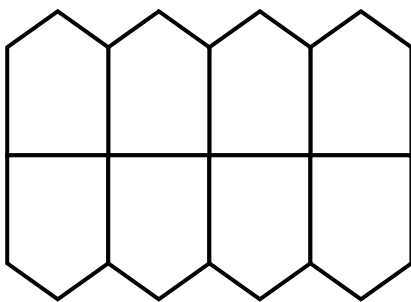
Shade  $\frac{1}{3}$



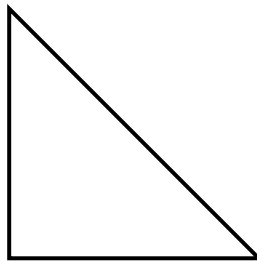
Shade  $\frac{2}{3}$



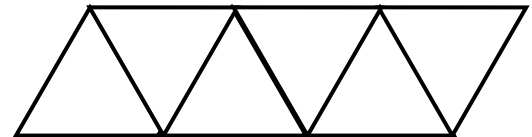
Shade  $\frac{1}{2}$



Shade  $\frac{3}{4}$



Shade  $\frac{1}{2}$



Shade  $\frac{2}{3}$

Name

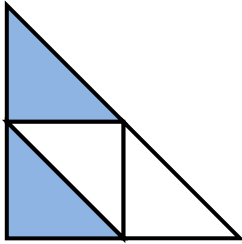
Date



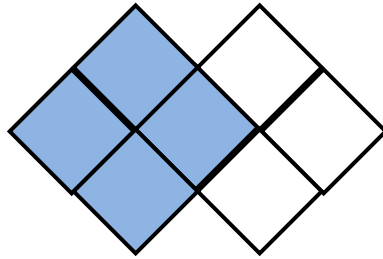
# FRACTIONS OF SHAPES 3 ANSWERS

Shade the correct fraction of each shape.

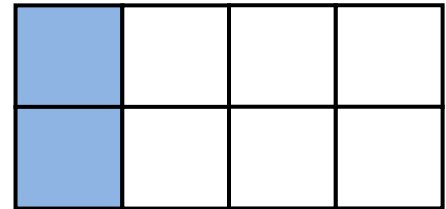
Remember  $\frac{1}{4}$  means 1 out of every 4!



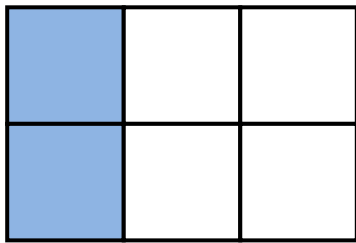
Shade  $\frac{1}{2}$




Shade  $\frac{4}{7}$



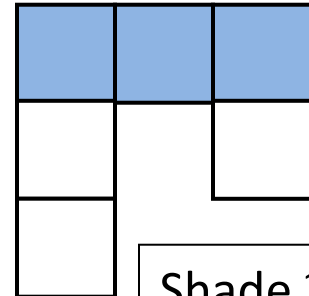
Shade  $\frac{1}{4}$



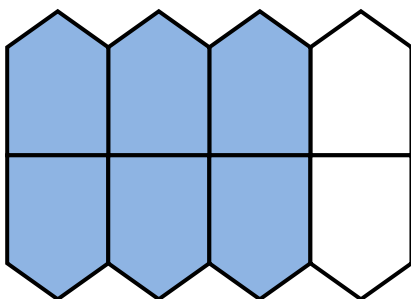
Shade  $\frac{1}{3}$



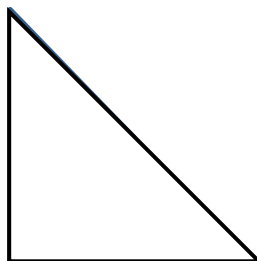
Shade  $\frac{2}{3}$



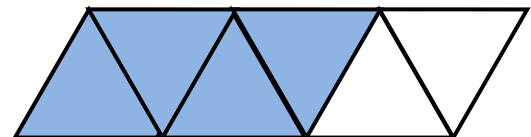
Shade  $\frac{1}{2}$



Shade  $\frac{3}{4}$



Shade  $\frac{1}{2}$



Shade  $\frac{2}{3}$

