

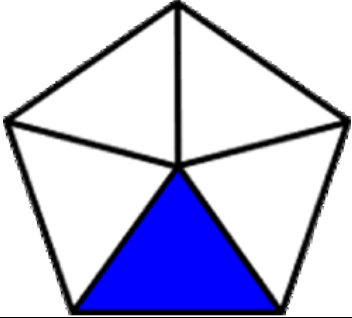
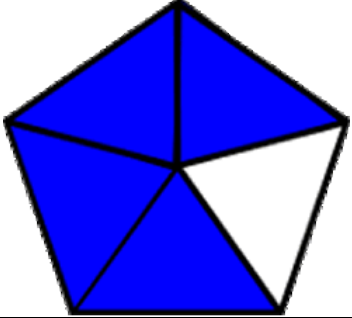
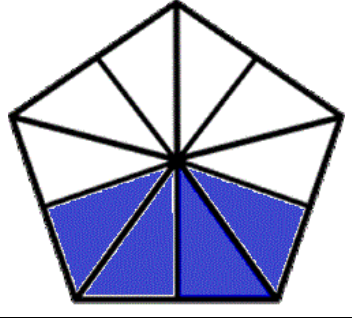


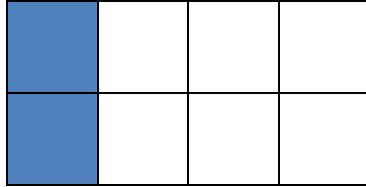
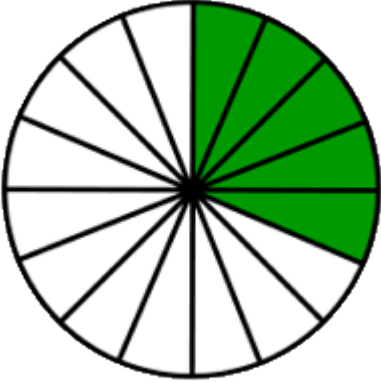
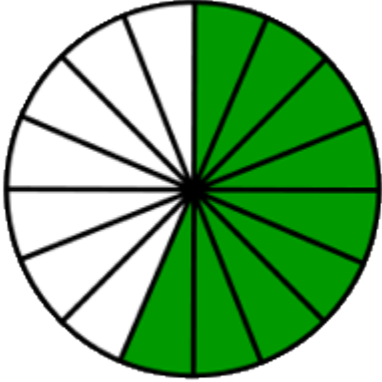
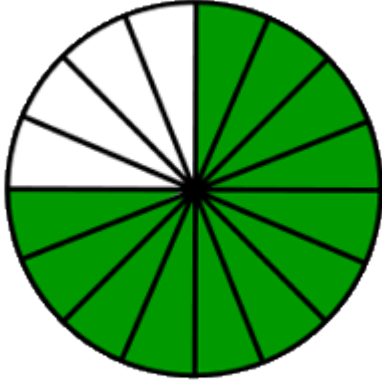
Identify fractions

Grade 2 Fractions Worksheet

Color the shapes according to the fractions below each shape.

$\frac{1}{5}$	$\frac{4}{5}$	$\frac{2}{5}$
$\frac{3}{8}$	$\frac{6}{8}$	$\frac{1}{4}$
$\frac{5}{16}$	$\frac{9}{16}$	$\frac{3}{4}$

Answers

		
$\frac{1}{5}$	$\frac{4}{5}$	$\frac{2}{5}$
		
$\frac{3}{8}$	$\frac{6}{8}$	$\frac{1}{4}$
		
$\frac{5}{16}$	$\frac{9}{16}$	$\frac{3}{4}$