



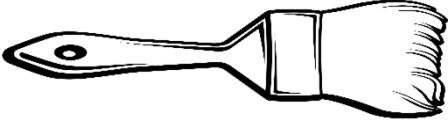



Units of length (inches and feet)

Grade 2 Measurement Worksheet

Fill in the proper unit (inches or feet) for each of the measurements below.
Hint: 1 foot = 12 inch

<p>Height of a sundae: 7 _____</p> 	<p>Length of a hammer: 15 _____</p> 
<p>Height of a boy: 4 _____</p> 	<p>Length of a key: 2 _____</p> 
<p>Length of a paintbrush: 8 _____</p> 	<p>Length of a picture frame: 2 _____</p> 

Answers

Height of a sundae: 7 **inches**

Length of a hammer: 15 **inches**

Height of a boy: 4 **feet**

Length of a key: 2 **inches**

Length of a paintbrush: 8 **inches**

Length of a picture frame: 2 **feet**