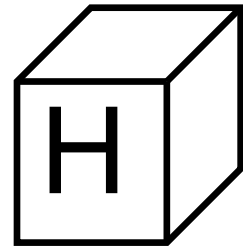



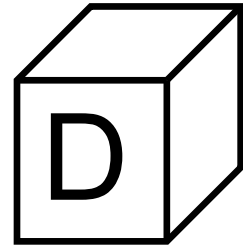
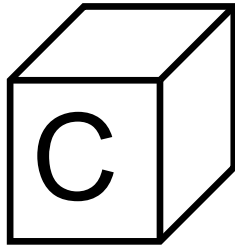
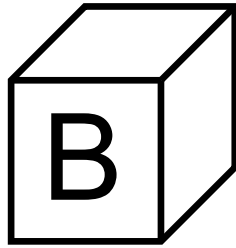
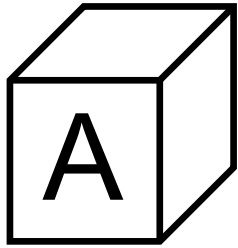


Above and below

Kindergarten Position Worksheets: Above and Below

Look at the blocks and answer the questions:



1. Which block is above the “E” block? _____
2. Which block is below the “A” block? _____
3. Which block is above the “H” block? _____
4. Which block is below the “C” block? _____
5. Which block is above the “F” block? _____