


Making 10 with objects

Kindergarten addition worksheets


Draw more circles so you have 10 circles. Write the numbers.




$$\underline{2} + \underline{\quad} = \underline{10}$$




$$\underline{6} + \underline{\quad} = \underline{10}$$



$$\underline{4} + \underline{\quad} = \underline{10}$$



$$\underline{9} + \underline{\quad} = \underline{10}$$

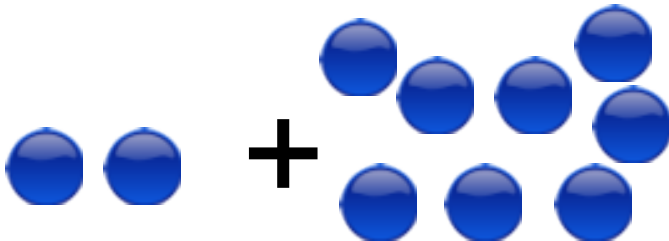



$$\underline{3} + \underline{\quad} = \underline{10}$$

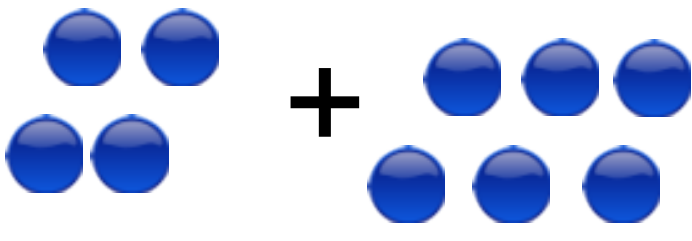
Making 10 with objects

Kindergarten addition worksheet

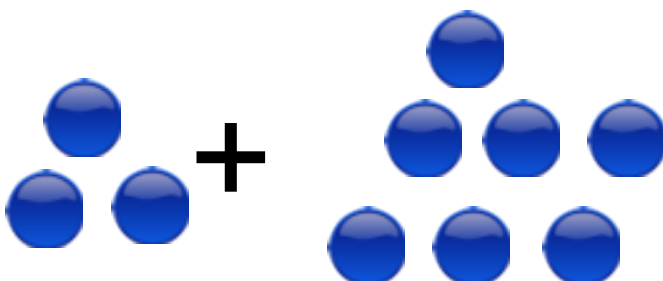
Draw more circles so you have 10 circles. Write the numbers.


$$\underline{2} + \underline{8} = \underline{10}$$


$$\underline{6} + \underline{4} = \underline{10}$$


$$\underline{4} + \underline{6} = \underline{10}$$


$$\underline{9} + \underline{1} = \underline{10}$$


$$\underline{3} + \underline{7} = \underline{10}$$