




Solve each problem.


Answers

1) Which letter best shows -96?



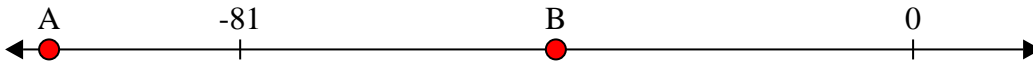
1. _____

2) Which letter best shows -40?




2. _____

3) Which letter best shows -104?




3. _____

4) Which letter best shows -49?



4. _____

5) Which letter best shows -110?




5. _____

6) Which letter best shows -24?




6. _____

7) Which letter best shows -72?




7. _____

8) Which letter best shows -39?




8. _____

9) Which letter best shows -95?



9. _____

10) Which letter best shows -102?



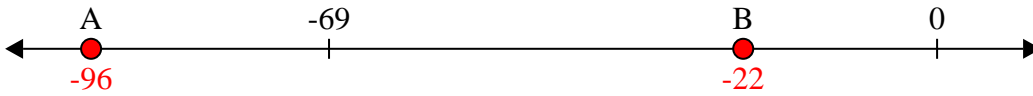
10. _____



Solve each problem.

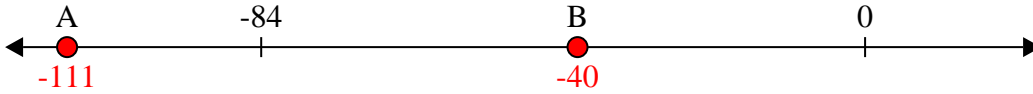
Answers

1) Which letter best shows -96?



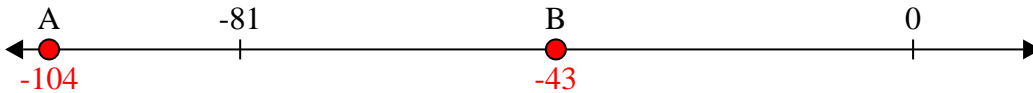
1. **A**

2) Which letter best shows -40?



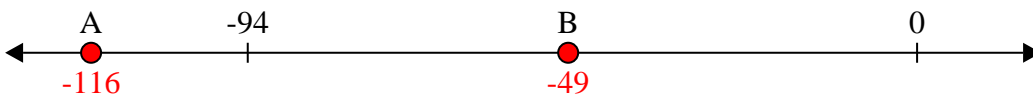
2. **B**

3) Which letter best shows -104?



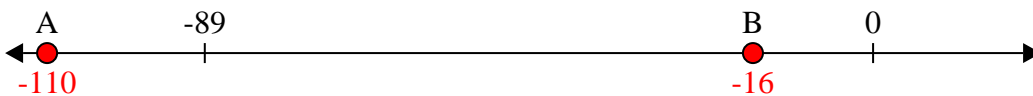
3. **A**

4) Which letter best shows -49?




4. **B**

5) Which letter best shows -110?




5. **A**

6) Which letter best shows -24?



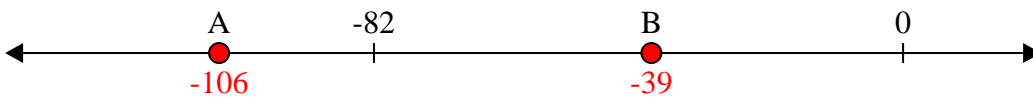
6. **B**

7) Which letter best shows -72?




7. **A**

8) Which letter best shows -39?




8. **B**

9) Which letter best shows -95?



9. **A**

10) Which letter best shows -102?



10. **A**