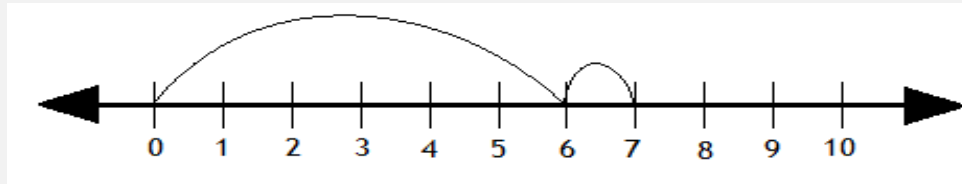


Adding with number lines

Grade 1 Addition Worksheet

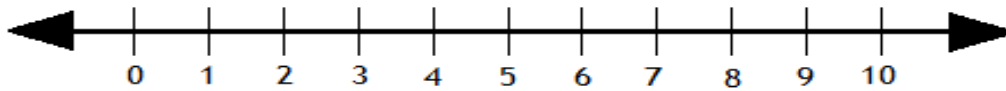
Solve the following by drawing hops on the number line.

Example:



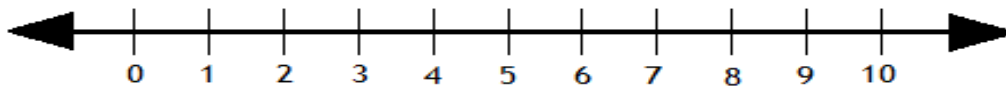
$$6 + 1 = \boxed{7}$$

1.



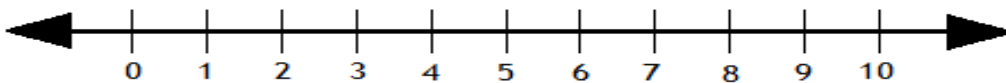
$$5 + 2 = \boxed{}$$

2.



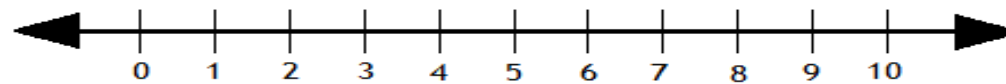
$$4 + 4 = \boxed{}$$

3.



$$3 + 1 = \boxed{}$$

4.



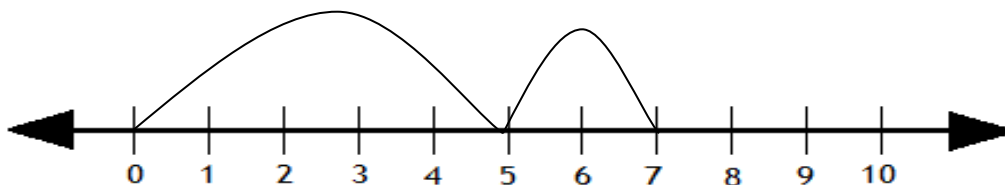
$$6 + 4 = \boxed{}$$

Adding with number lines

Grade 1 Addition Worksheet

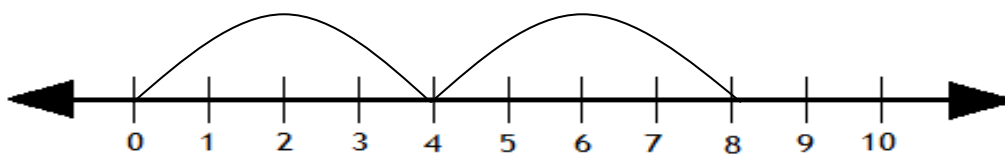
Answers

1.



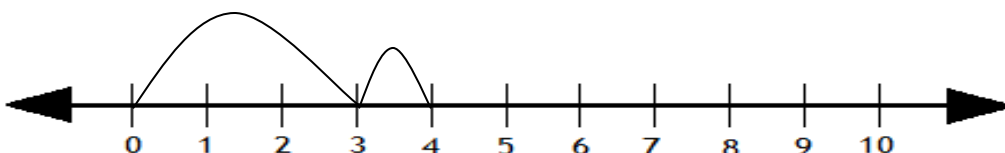
$$5 + 2 = \boxed{7}$$

2.



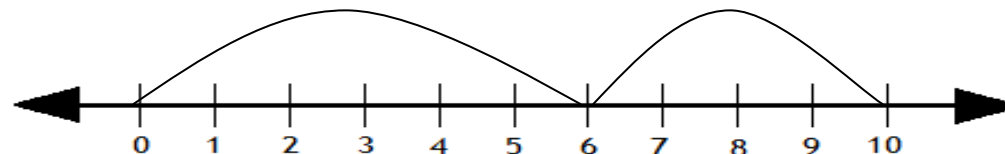
$$4 + 4 = \boxed{8}$$

3.



$$3 + 1 = \boxed{4}$$

4.



$$6 + 4 = \boxed{10}$$