

Name _____

Date _____



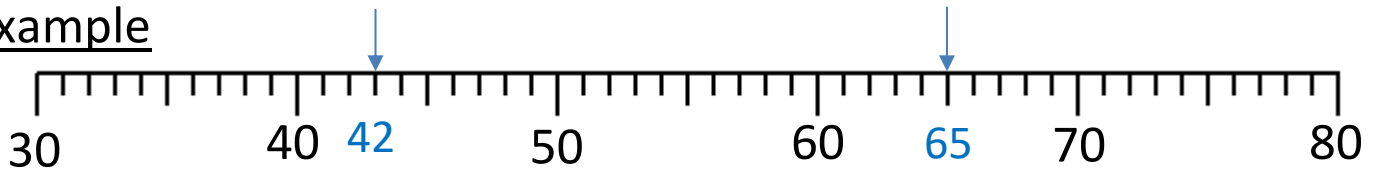
ROUNDING TO THE NEAREST 10 SHEET 2

Write down the value of each number marked by an arrow.

Round the number to the nearest 10.

Remember: if the number is exactly half-way, it will round up to the next ten.

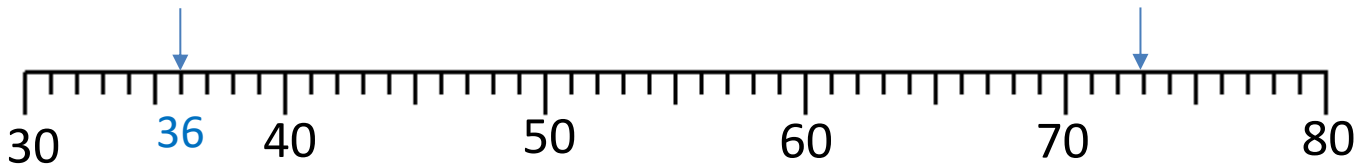
Example



42 to the nearest 10 is 40

65 to the nearest 10 is 70

1)



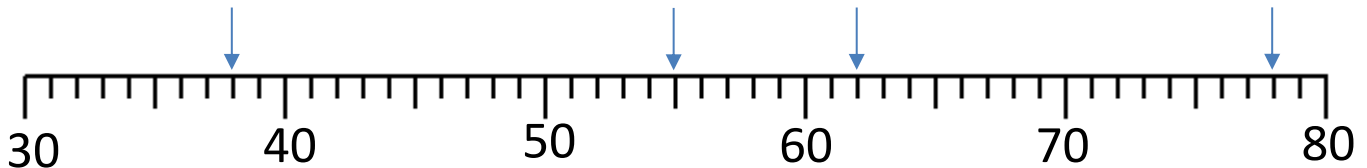
36 to the nearest 10 is _____ to the nearest 10 is _____

2)



_____ to the nearest 10 is _____ to the nearest 10 is _____

3)



_____ to the nearest 10 is _____ to the nearest 10 is _____

_____ to the nearest 10 is _____ to the nearest 10 is _____



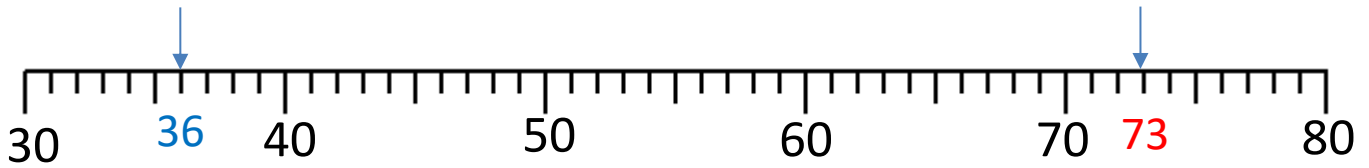
Name

Date



ROUNDING TO THE NEAREST 10 SHEET 2 ANSWERS


1)



36 to the nearest 10 is 40

73 to the nearest 10 is 70

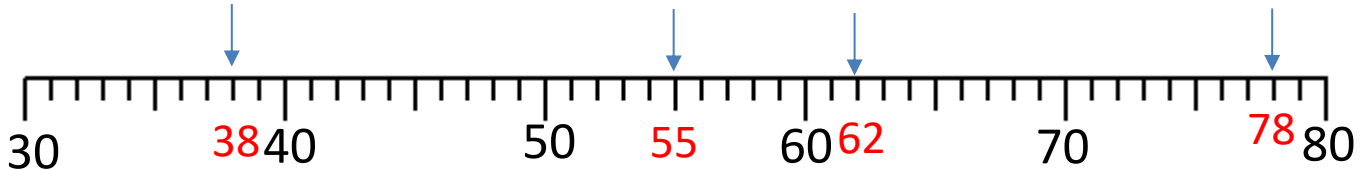
2)



45 to the nearest 10 is 50

64 to the nearest 10 is 60

3)



38 to the nearest 10 is 40

55 to the nearest 10 is 60

62 to the nearest 10 is 60

78 to the nearest 10 is 80

