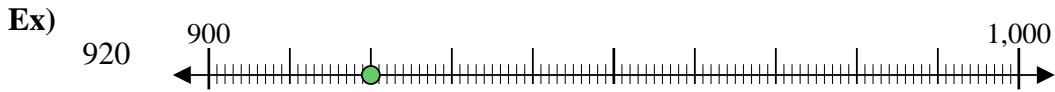




Use the numberlines to round each number to the nearest 100.

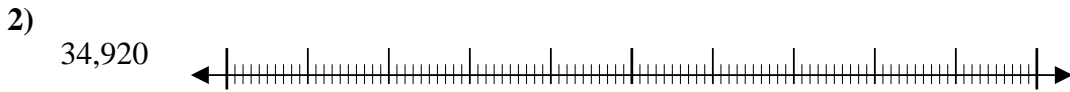
Answers



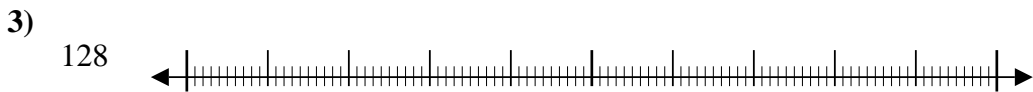
Ex. 900



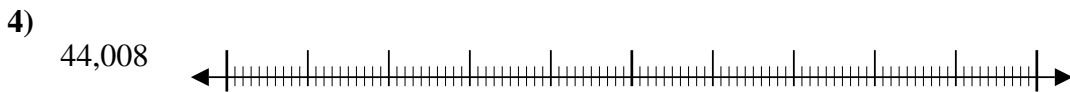
1. _____



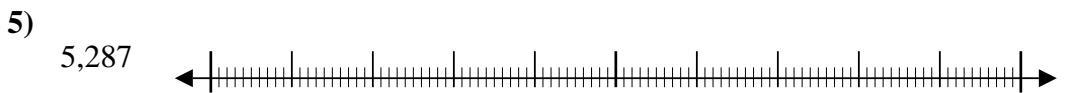
2. _____



3. _____



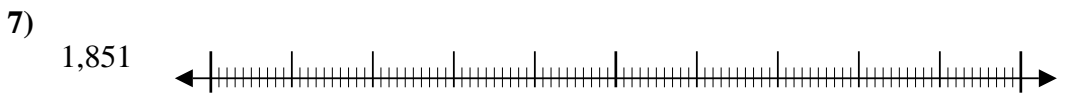
4. _____



5. _____



6. _____



7. _____



8. _____



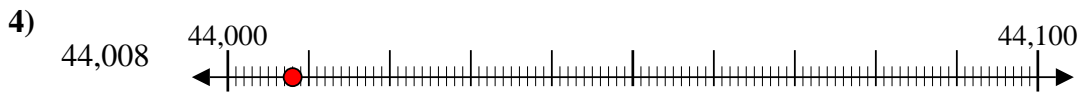
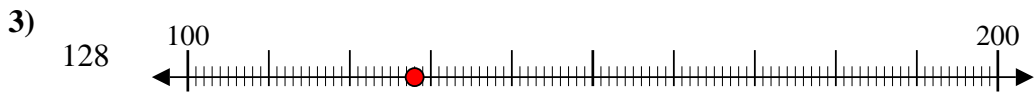
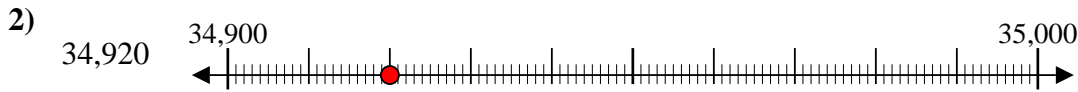
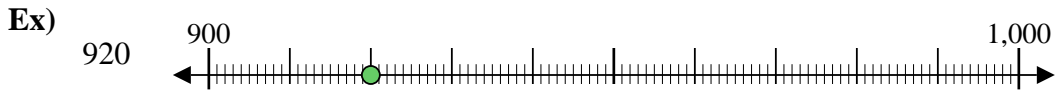
9. _____



10. _____



Use the numberlines to round each number to the nearest 100.



Answers

Ex. 900

1. 100

2. 34,900

3. 100

4. 44,000

5. 5,300

6. 4,800

7. 1,900

8. 95,200

9. 2,300

10. 200