

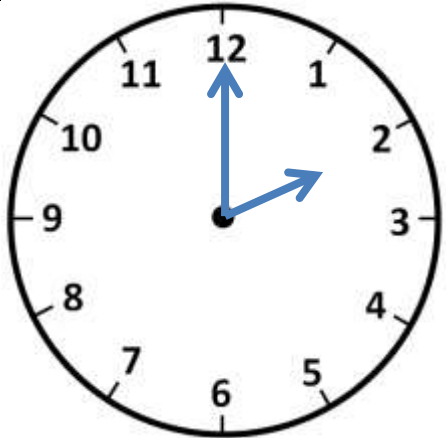
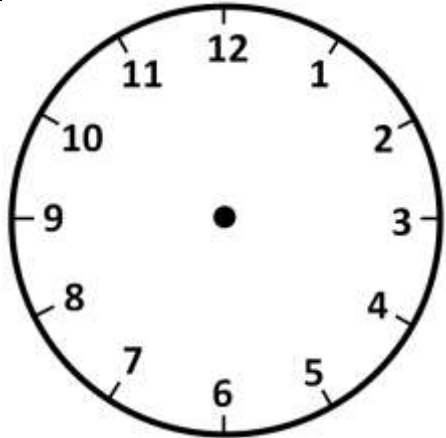
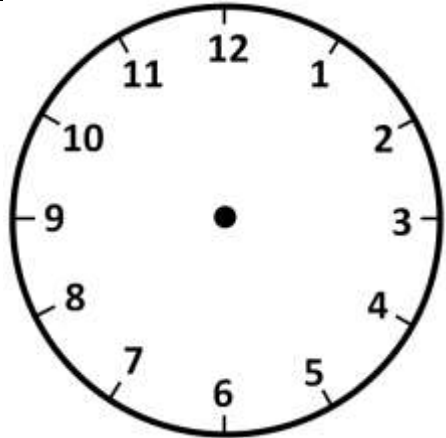
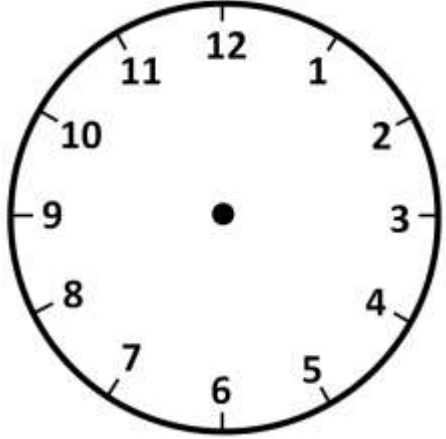
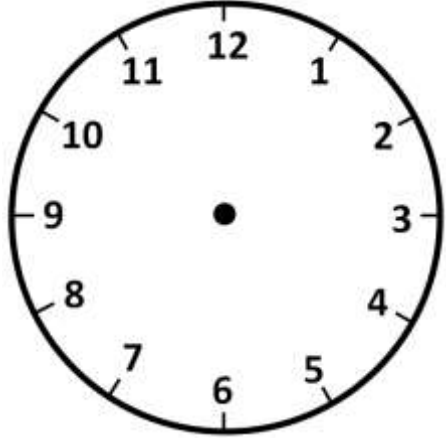
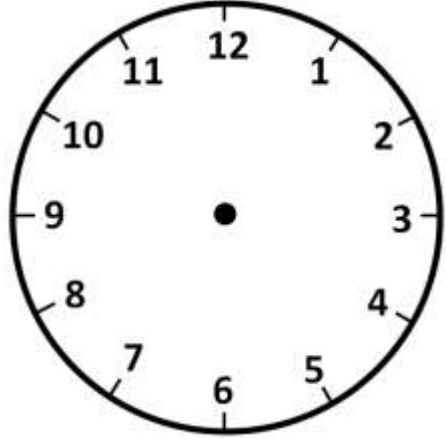
Name

Date



TELLING THE TIME - O'CLOCK SHEET 2

Draw in the hands to show the correct time. The first one has been done for you.

		
2 o'clock	9 o'clock	5 o'clock
		
10 o'clock	2 o'clock	7 o'clock

How many minutes are there in an hour?



Name

Date



TELLING THE TIME - O'CLOCK SHEET 2 ANSWERS

Draw in the hands to show the correct time. The first one has been done for you.

2 o'clock	9 o'clock	5 o'clock
10 o'clock	2 o'clock	7 o'clock

How many minutes are there in an hour? **Answer: 60 minutes**

