

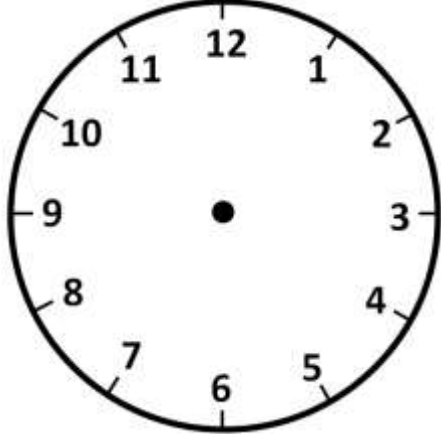
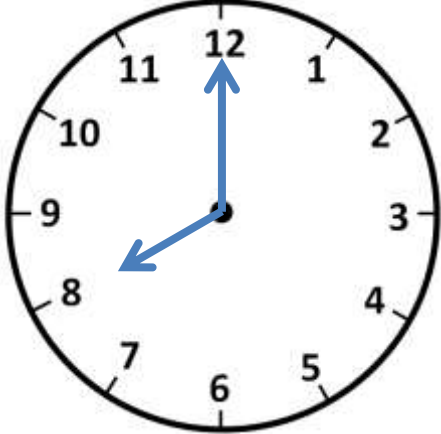
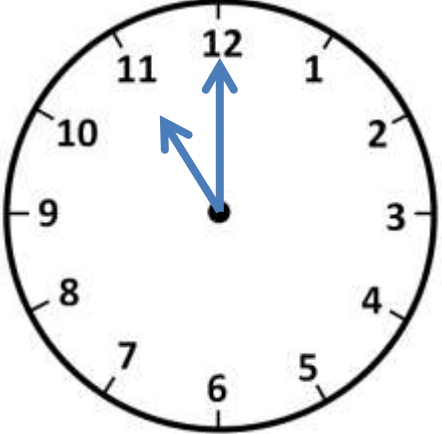
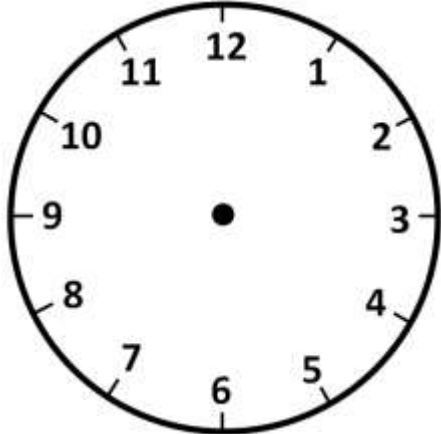
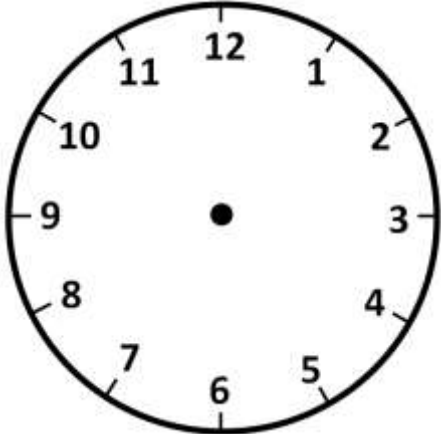
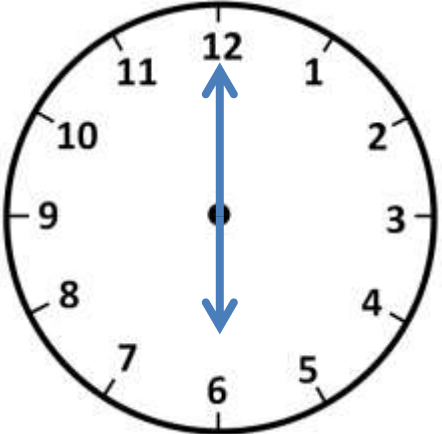
Name _____

Date _____



TELLING THE TIME - O'CLOCK SHEET 3

For each time, you need to either draw in the hands or write the time.

		
3 o'clock	___ o'clock	___ o'clock
		
5 o'clock	9 o'clock	___ o'clock

Fill in the missing times:

2 o'clock → 2:00

5 o'clock → ___:___

9 o'clock → ___:___



Name

Date



TELLING THE TIME - O'CLOCK SHEET 3 ANSWERS

3 o'clock	<u>8</u> o'clock	<u>11</u> o'clock
5 o'clock	9 o'clock	<u>6</u> o'clock

Fill in the missing times:

2 o'clock → 2:00

5 o'clock → 5:00

9 o'clock → 9:00

