













## Telling time Worksheet

Write the time.

<p><b>1 a.</b></p>  <p style="text-align: center;">_____ : _____</p>	<p><b>1 b.</b></p>  <p style="text-align: center;">_____ : _____</p>	<p><b>1 c.</b></p>  <p style="text-align: center;">_____ : _____</p>
<p><b>2 a.</b></p>  <p style="text-align: center;">_____ : _____</p>	<p><b>2 b.</b></p>  <p style="text-align: center;">_____ : _____</p>	<p><b>2 c.</b></p>  <p style="text-align: center;">_____ : _____</p>
<p><b>3 a.</b></p>  <p style="text-align: center;">_____ : _____</p>	<p><b>3 b.</b></p>  <p style="text-align: center;">_____ : _____</p>	<p><b>3 c.</b></p>  <p style="text-align: center;">_____ : _____</p>
<p><b>4 a.</b></p>  <p style="text-align: center;">_____ : _____</p>	<p><b>4 b.</b></p>  <p style="text-align: center;">_____ : _____</p>	<p><b>4 c.</b></p>  <p style="text-align: center;">_____ : _____</p>

Name: \_\_\_\_\_ Date: \_\_\_\_\_

## Answer Key

<b>1 a.</b> 7:21	<b>1 b.</b> 9:47	<b>1 c.</b> 10:58
<b>2 a.</b> 1:22	<b>2 b.</b> 5:16	<b>2 c.</b> 2:34
<b>3 a.</b> 9:58	<b>3 b.</b> 3:28	<b>3 c.</b> 7:36
<b>4 a.</b> 6:59	<b>4 b.</b> 2:25	<b>4 c.</b> 4:52