


## Telling time Worksheet


Write the time.

1 a.




\_\_\_\_\_ : \_\_\_\_\_

1 b.




\_\_\_\_\_ : \_\_\_\_\_

2 a.




\_\_\_\_\_ : \_\_\_\_\_

2 b.




\_\_\_\_\_ : \_\_\_\_\_

3 a.



\_\_\_\_\_ : \_\_\_\_\_

3 b.



\_\_\_\_\_ : \_\_\_\_\_

Name: \_\_\_\_\_ Date: \_\_\_\_\_

## Answer Key

1 a.	9:00	1 b.	3:00
2 a.	5:00	2 b.	7:00
3 a.	2:00	3 b.	1:00